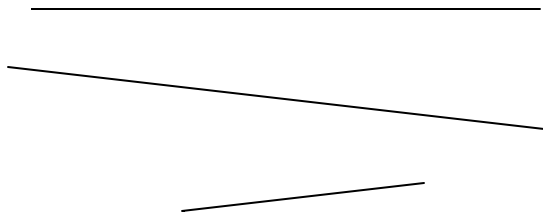


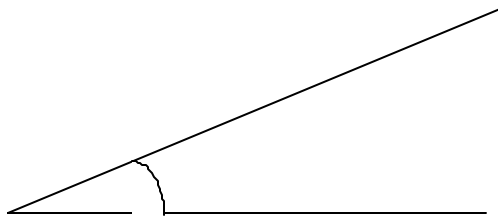
Geometric Instruments

1c name

1) Measure each interval to the nearest mm.



2) Measure this angle



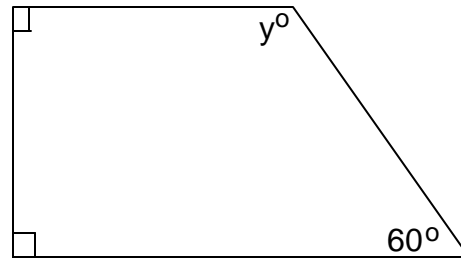
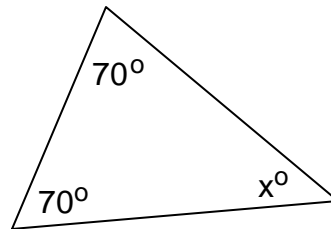
3) Construct the perpendicular bisector of this interval using a compass, clearly showing all parts of the construction.

A _____ B

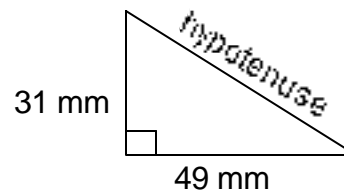
5) Accurately divide the interval PQ into 4 equal parts.

P _____ Q

6) Find the pronumeral by calculating, not measuring.



7) Using a set square and ruler, accurately draw this right angle triangle and measure the hypotenuse.



parents signature and comment