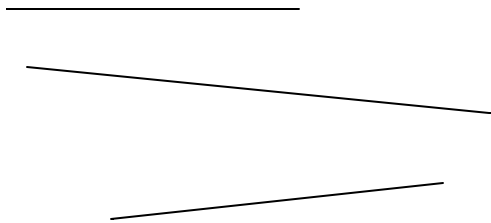
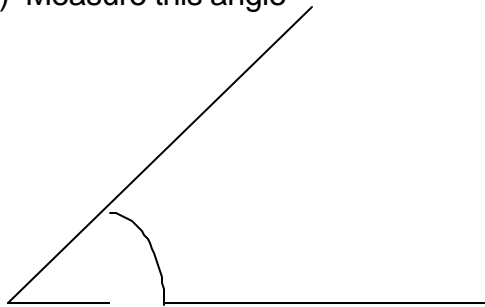


Geometric Instruments

1) Measure each interval to the nearest mm.



2) Measure this angle



3) Construct the perpendicular bisector of this interval using a compass, clearly showing all parts of the construction.

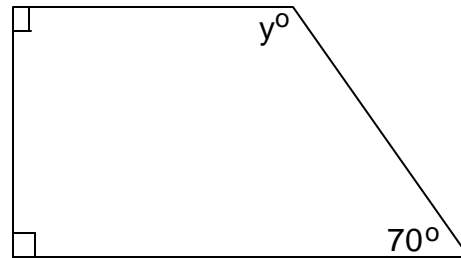
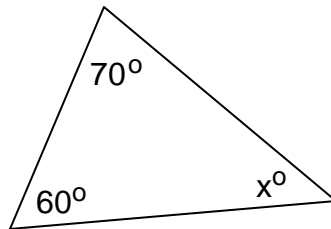
A _____ B

5) Accurately divide the interval PQ into 5 equal parts.

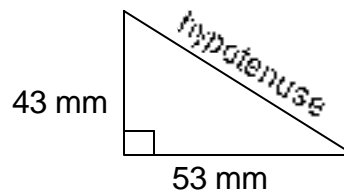
P _____ Q

1d name

6) Find the pronumeral by calculating, not measuring.



7) Using a set square and ruler, accurately draw this right angle triangle and measure the hypotenuse.



parents signature and comment