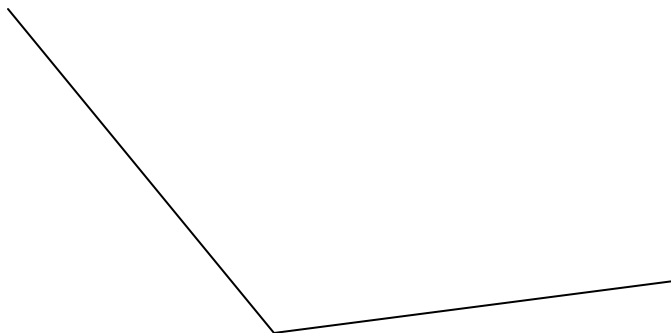
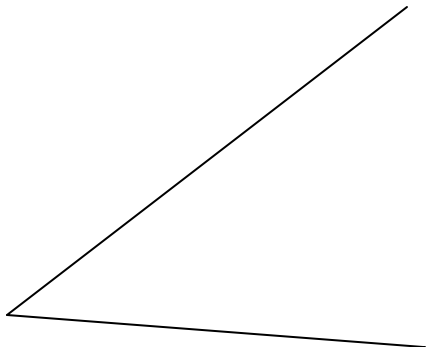



Geometric Instruments 3 (p2) name

Perform the following constructions with a ruler and compass

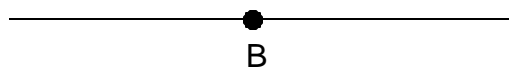
Bisect these angles




Construct the perpendicular bisector of AB



Construct a right angle at B



Construct a right angle at B



Construct a perpendicular from C to AB

