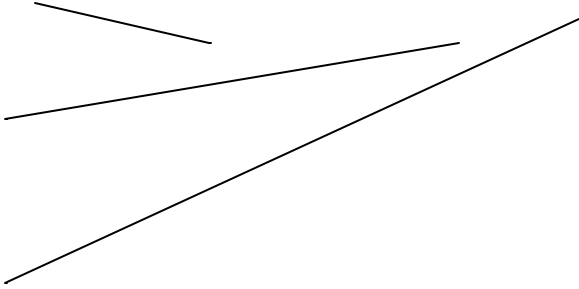



Measurement 1c

name.....

1) Measure the following intervals to the nearest cm.



2) Measure the following intervals to the nearest mm.

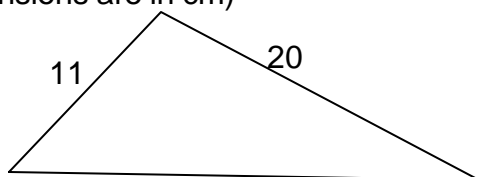


2) Complete

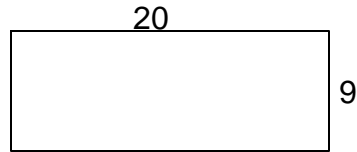
- a) 7 cm =mm
- b) 2 km =m
- c) 0.7 m =cm
- d) 8000 cm =m
- e) 52300 m =km
- f) 3800 mm =m
- g) 6 km =m
- h) 2 m =mm

3) Find the perimeter of these shapes (All dimensions are in cm)

a)



b)



4) Complete

- a) 9 kg =g
- b) 2000 g =kg
- c) 0.3 kg =g
- d) 6000 mg =g
- e) 75500 g =kg

5) Choose the appropriate measuring instrument to measure each of the following.
(Choose from this list: ruler, tape, trundle wheel, odometer.)

- a) height of a door
- c) length of a photo
- d) length of a running track
- b) distance from Nowra to Sydney
.....

6) What is the mass of :

- a) 1 litre of water
- b) 1 ml of water

7)a) 4 weeks = days

- b) 1 year = days
- c) 1 year = weeks
- d) 1 day = hours
- e) 1 fortnight = days
- f) 6 minutes = seconds