

MEASUREMENT TEST 2b

name

- ① After jogging , Tim counted 43 pulse beats in 20 seconds. What is his pulse rate ?

- ② a) 3 hours = min
b) 5 weeks = days
c) 2 min = sec
d) 1 leap year = days
e) 1 year = weeks
f) 4 days = hours
g) 5 kg = grams
h) 3 tonnes = kg
i) 7 metres = mm
j) 80 mm = cm
k) 1 km = cm

- ③ Convert to 24 hour time

- a) 2.30 pm =
b) 3.15 am =

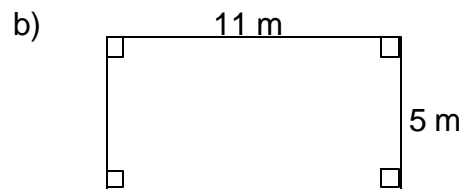
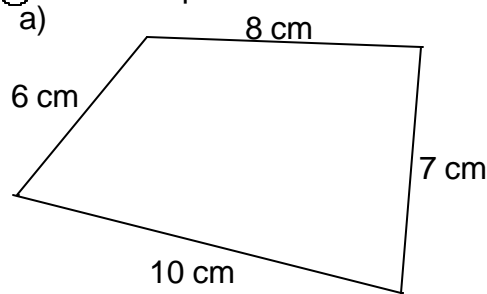
- ④ Convert to 12 hour time

- a) 2020 hours =
b) 0315 hours =

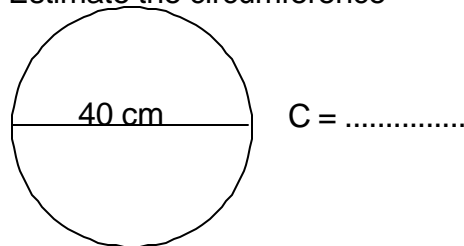
- ⑤ What is the mass of

- a) 2 litres of water
b) 5 ml of water

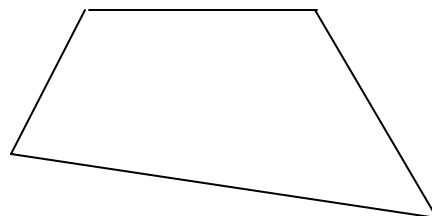
- ⑥ Find the perimeter



- ⑦ Estimate the circumference



- ⑧ In this scale drawing, the scale is 1 cm : 30 m. Find the perimeter.



- ⑨ On a scale drawing a building 4 m long was drawn 16 cm long. What was the scale used ?

- ⑩ How many minutes are there between 9.49 pm and 12.13 am ?

- ⑪ Find the perimeter of a square with side length 35 cm.

- ⑫ Jasmin's birthday is on the 18th of January and Fred's birthday is 33 days later. When is Fred's birthday ?

- ⑬ Estimate the mass of
(suitable person)

- ⑭ Carli runs 3 km in 20 minutes (then collapses). What is her speed ?