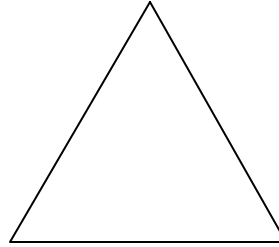
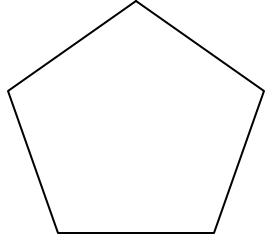
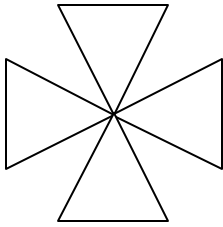


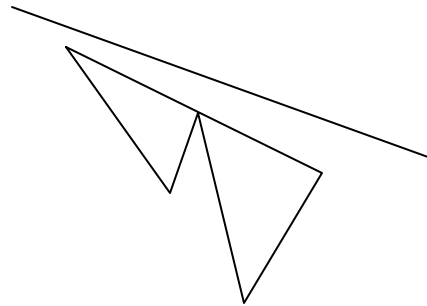
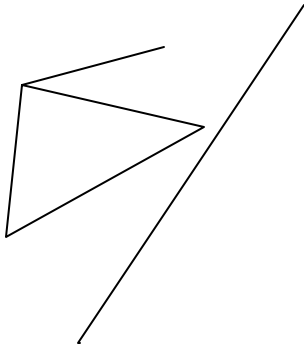
# Shapes Test 2c

name.....

1) Draw all the axes of symmetry on the following diagrams



2) Reflect the following shapes across the given axis of symmetry



3) Name the following shape and draw a net for the shape.

