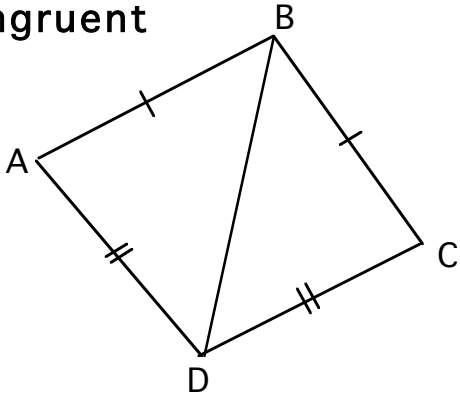


Congruence

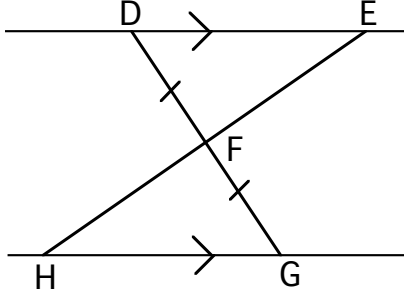
1) Prove that these triangles are congruent

name.....

a)



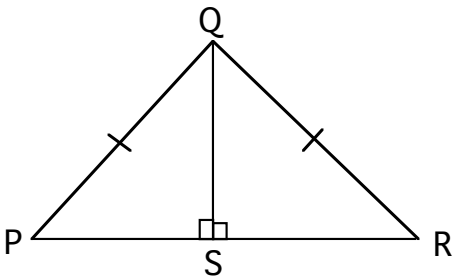
c)



2)

Two chords AB and CD are drawn in a circle, which has centre O, so that $\angle AOB = \angle COD$. Prove that the chords must be of equal length. (Draw a diagram).

b)



d)

